





SHAKE THE PRESENTS (A)


Simplify each fraction and figure out what is in each box.


1. $\frac{8}{24} =$ 


6. $\frac{9}{18} =$ 


2. $\frac{10}{20} =$ 


7. $\frac{56}{80} =$ 


3. $\frac{9}{18} =$ 

8. $\frac{30}{50} =$ 

4. $\frac{8}{48} =$ 

9. $\frac{32}{48} =$ 

5. $\frac{12}{24} =$ 

10. $\frac{20}{30} =$ 

MERRY CHRISTMAS FROM MATH-DRILLS.COM!