


Counting Christmas Objects (A)

Name: _____


Date: _____

Count how many objects there are in each group.


1. There are _____ baubles in the group below.



2. There are _____ bows in the group below.



3. There are _____ presents in the group below.



4. There are _____ Christmas trees in the group below.




Counting Christmas Objects (A) Answers

Name: _____

Date: _____

Count how many objects there are in each group.


1. There are 42 baubles in the group below.



2. There are 20 bows in the group below.



3. There are 40 presents in the group below.



4. There are 27 Christmas trees in the group below.

